








Name _____

MINOR SCALES

1. Notate the indicated minor scale (for odd-numbered problems in the left column, **do not** use a key signature; for even-numbered problems in the right column, **do** use a key signature).

1. e(N) 	2. c#(H) 
3. f(N) 	4. d(MA) 
5. g#(N) 	6. f#(H) 
7. c(N) 	8. b#(H) 
9. g(N) 	10. a(MA) 

2. Notate the indicated minor scale (for odd-numbered problems, **do not** use a key signature; for even-numbered problems, **do** use a key signature).

1. (N) 	2. (MA) 
3. (N) 	4. (H) 
5. (N) 	6. (H) 
7. (N) 	8. (MA) 