

WS 43: Modes I

Name _____

Notate the indicated modes (for odd-numbered examples, **do not** use a signature; for even-numbered examples, **do** use a signature).

1. Dorian on G




2. Lydian on C



3. Mixolydian on D




4. Phrygian on B



5. Lydian on B \flat




6. Dorian on A



7. Phrygian on A



8. Mixolydian on C



9. Aeolian on F



10. Ionian on B



11. Dorian on E



12. Lydian on E \flat



13. Mixolydian on F



14. Phrygian on D



15. Locrian on E



16. Dorian on C



17. Phrygian on F \sharp



18. Mixolydian on A



19. Lydian on G



20. Aeolian on B \flat

